

St. Mary's School, Dwarka

Practice Worksheet (June)

Class: III

Subject: English

Name: _____ Sec: ___ Date: _____ Roll No. _____


1. Write two more rhyming words for the following given words.

a. sight _____

b. knees _____

c. treasure _____

2. Form as many words as you can from the word 'CATERPILLAR'.



3. Unscramble the letters to make meaningful words.

a. atsfe _____

b. wleto _____

c. freidn _____

d. flseh _____

e. fotgre _____

f. nrowb _____

4. Change a letter to make a new word as shown.

cap---map

a. better --- _____

b. brass --- _____

c. lunch--- _____

d. gate--- _____

5. Add suitable words from the box to form new words as shown.

time flies print port man work

life + time = lifetime

a. foot + _____ = _____

b. post + _____ = _____

c. pass + _____ = _____

d. butter + _____ = _____

e. home + _____ = _____

6. Colour the following picture and write five sentences about it.

park picnic sandwiches cookies fun mat



St. Mary's School, Dwarka
Practice Worksheet (June)
Class: III
Subject: Mathematics

Name: _____ Sec: _____ Date: _____ Roll No: _____

1. Choose the correct answer.

a) 8507 is greater than

- i) 9846 ii) 8503 iii) 8510

b) The place value of 9 in 6942 is

- i) 900 ii) 9 iii) 90

c) The smallest number that can be formed using the digits 7, 0, 6, 1 is

- i) 1076 ii) 7610 iii) 1067

d) The largest 4-digit number is

- i) 9999 ii) 1000 iii) 99999

e) The predecessor of 4230 is

- i) 4231 ii) 4229 iii) 4239

2. Fill in the blanks.

a) $(345 + 111) + 456 = 345 + (\quad + 456)$

b) $7201 + 0 = \quad$

c) The number 100 more than 8947 is _____.

d) The number before 6542 is _____.

e) The successor of 9898 is _____.

f) 9305  9035 (put <, >, =)

g) The sum of 2789 and 1000 is _____.

3. Round off 6119 to the

a) nearest 10's _____

b) nearest 100's _____

4. Circle the even numbers given in the box.

4444, 5673, 2141, 8090, 6524, 7851

5. Arrange the following numbers in descending order.

1902, 2538, 7442, 3416

6. Estimate the sum to the nearest 100's.

a) $159 + 209$

7. Ramesh has a farm. He bought a cow for ₹ 2500, a horse for ₹3750 and a buffalo for ₹4260. How much money did Ramesh spend in all?

8. Figure me out

My Age

_____ + 3 = _____

My Shoe Size

_____ × 4 = _____

My Birth Month

_____ + 30 = _____

My Birth Date

_____ + 45 = _____

The number of people in my family

_____ × 5 = _____



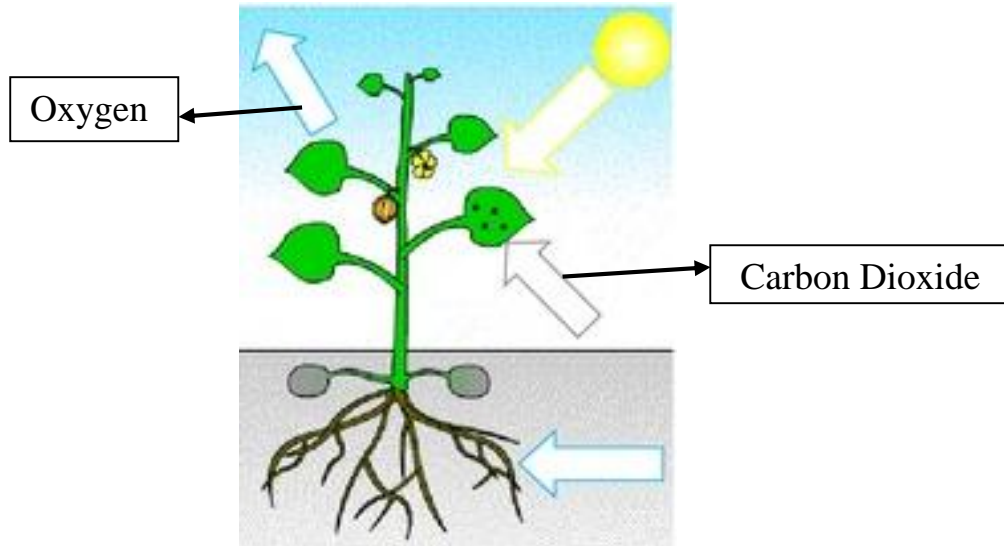
The number of letters in my name

_____ - 6 = _____

The number of pets I own

_____ + 0 = _____

1. Observe the following picture and answer the questions that follow.



a) Which key ingredients are missing in this picture?

b) Name the process taking place in the picture above. Why is it important for the plants?

2. List down the following animals under the correct column.

honey bee, sloth, wolf, bovine, hedgehog, whales, horse , pig, platypus

Herbivores	Carnivores	Omnivores

3. Unscramble the following words related to birds.

a) EBASK _____

b) LATI _____

c) GSNWI _____

d) CWASL _____

e) RECPH _____

f) ERFAHTES _____


4. Complete the crossword with the help of the clues given.

Across

- 2. This plant has fibrous roots.
- 3. Plants are _____ things.
- 4. Holes under the leaves are called _____.
- 6. An underground eatable stem.

Down

- 1. Most plants have _____ that make seeds.
- 5. The king of fruits.
- 7. The _____ holds the plant straight and upright.




5. Answer the following questions.

a) If the sun stops shining, what do you think will happen to the plants and why?

b) If there are no plants, who will be affected- the herbivores or the carnivores? Explain.

1. Look at the picture and answer the following questions.



a) What type of pollution is being caused?

b) Write two ways to reduce this type of pollution.

2. Read the clues and solve the word puzzle.

Across

2. The number of planets in our solar system.

3. The planet between Jupiter and Uranus.

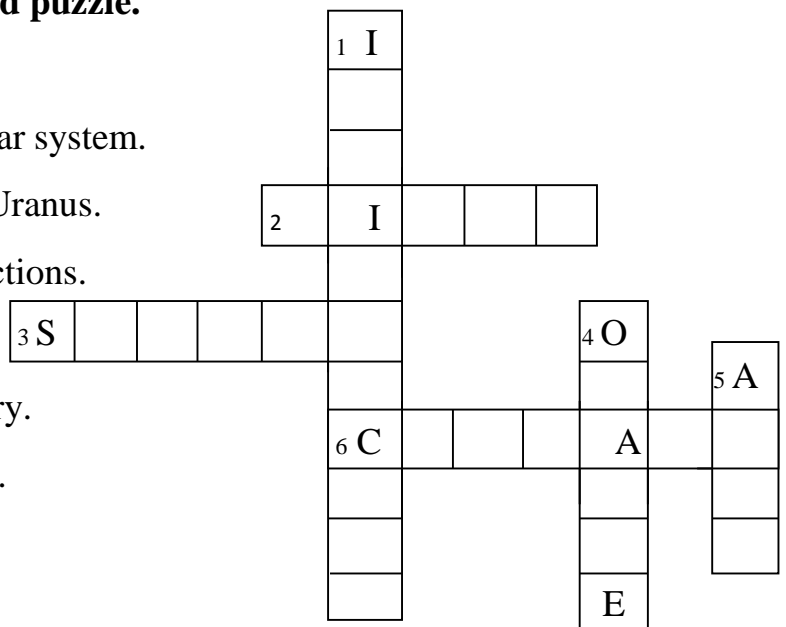
6. The instrument used to find directions.

Down

1. The ocean named after our country.

4. The Earth is shaped like this fruit.

5. The continent in which we live.



3. Make a list of two things which you can

Reduce

- a) _____

b) _____

Reuse

- a) _____

b) _____

Recycle

- a) _____

b) _____

4. Find and circle the six words related to the universe in the word search.

M	C	O	M	E	T	S	T
B	A	L	S	T	N	P	I
E	A	R	T	H	O	R	B
R	V	W	S	A	O	D	R
E	B	V	X	G	M	F	O
M	I	L	K	Y	W	A	Y

5. Answer the following questions.

a) As you know that the Sun rises in the east. If you stand facing the Sun in the morning, which direction will be

- behind you - _____
- to your left - _____
- to your right - _____

b) Imagine that the Sun has decided to take a holiday and disappears from the sky. It becomes dark and cold. What do you think will happen?

St. Mary's School, Dwarka

June Practice Worksheet

Class: III

Subject: Hindi

Name: _____ Sec: _____ Date: _____ Roll No: _____

1. एक से दस तक गिनती की चित्र सहित कविता लिखो .

सूरज	नेत्र	लोक	दिशाएँ	विषय	ऋतुएँ	सुर	पहर	रस	अँगुलियाँ
------	-------	-----	--------	------	-------	-----	-----	----	-----------

एक सूरज जो बिखराए रोशनी

2. शब्द सीढी .

सीधा →

- 1 हरे रंग का पक्षी
- 3 इसमें पौधे उगाते हैं
- 4 हम इस ग्रह मे रहते हैं
- 5 यह हमें सरदी गरमी और बरसात से बचाता है

नीचे ↓

- 2 इसे चाबी से खोलते हैं
- 3 ढंड का विलोम
- 6 इससे पानी आता है
- 7 बाण चलाने का साधन

		1	2
	3		
4			
	5		6
7			

3. भाववाचक संज्ञा के नाम और चित्र सहित कोलाज बनाओ .

मिठास खुशी क्रोध दर्द आश्चर्य उदासी डर

4 किसी स्वतंत्रा सेनानी के बचपन की कहानी पढो जिससे आप प्रभावित हुए हो। उस घटना से आपने जो सीखा है उसे 30 से 40 शब्दों में लिखो .
